





Name \_\_\_\_\_

Date \_\_\_\_\_


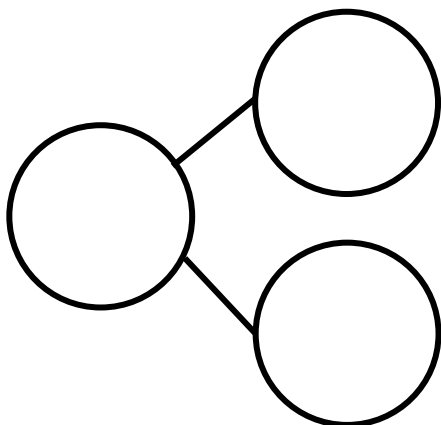
Fill in the number bond and number sentence. Cross off the part that goes away.

Jeremy had 9 baseballs. He took 5 baseballs outside to play, and they got lost. How many balls are left?



\_\_\_\_\_ - \_\_\_\_\_ = \_\_\_\_\_

Sandy had 9 leaves. Then, 4 leaves blew away. How many leaves are left?



\_\_\_\_\_ - \_\_\_\_\_ = \_\_\_\_\_